

Urbanisation Short Qs

Question 1

12. SHANTY TOWNS

Indicate which **three** of the following statements are correct by ticking (✓) the correct box.

1. A shanty town is an example of urban planning.
2. Birth rates are high in shanty towns.
3. Shanty towns in Calcutta are called bustees.
4. Poor sanitation and a lack of clean water are major problems in shanty towns.
5. Shanty towns are areas of low population densities.

1, 2, 3

1, 3, 5

2, 3, 4

2, 4, 5

Question 2

15. URBANISATION – BUILDING TYPES

In Dublin and other areas, large brick houses with wrought iron railings and rounded-arched doorways were built during which era?

Celtic

Georgian

Viking

Norman



Amended from mapio.net

Tick (✓) the correct box.

Question 3

8B. MIGRATION

In the boxes provided, match each of the letters in **Column X** with the number of its pair in **Column Y**. One match has been completed for you.

Column X	
A	Immigrant
B	Emigrant
C	Push factor
D	Pull factor

Column Y	
1	Good employment opportunities.
2	A person who migrates out of an area.
3	War and unrest.
4	A person who migrates into an area.

X	Y
A	
B	
C	3
D	

Question 4

15. URBANISATION

In the boxes provided, match each of the letters in **Column X** with the number of its pair in **Column Y**. One match has been completed for you.

Column X	
A	Primate city
B	Dormitory town
C	Shanty town
D	Urban renewal

Column Y	
1	A commuter town from where people travel to work.
2	A squatter development in cities in the developing world.
3	Old buildings replaced by modern structures.
4	A city that has twice the population of the next largest city.

X	Y
A	
B	
C	
D	3

Question 5

11A. URBANISATION

In the boxes provided, match each of the letters in **Column X** with the number of its pair in **Column Y**. One match has been completed for you.

Column X		Column Y		X	Y
A	Urban sprawl	1	A core area of business and shopping activity.	A	
B	Dormitory town	2	Old buildings replaced by modern structures.	B	4
C	CBD	3	The spread of urban development into rural areas.	C	
D	Urban renewal	4	The main function of this town is residential.	D	

Question 6

9A. URBAN GEOGRAPHY

The main function of a dormitory town is:

Recreational

Residential

Industrial

Defence

Tick (✓) the correct box.

Question 7

11B. SETTLEMENT

Examine the photographs below and name each housing type, by writing the correct answer in the spaces provided.



- A. _____
- B. _____
- C. _____

Question 8

In the boxes provided, match each of the letters in **Column X** with the number of its pair in **Column Y**. One match has been made for you.

Column X	
A	Urban Sprawl
B	CBD
C	Squatters
D	Urban Renewal

Column Y	
1	An area of highly skilled workers.
2	People who occupy homes illegally.
3	Old buildings replaced by modern structures.
4	Unplanned growth of a city.

X	Y
A	
B	
C	2
D	

16. URBAN ZONES

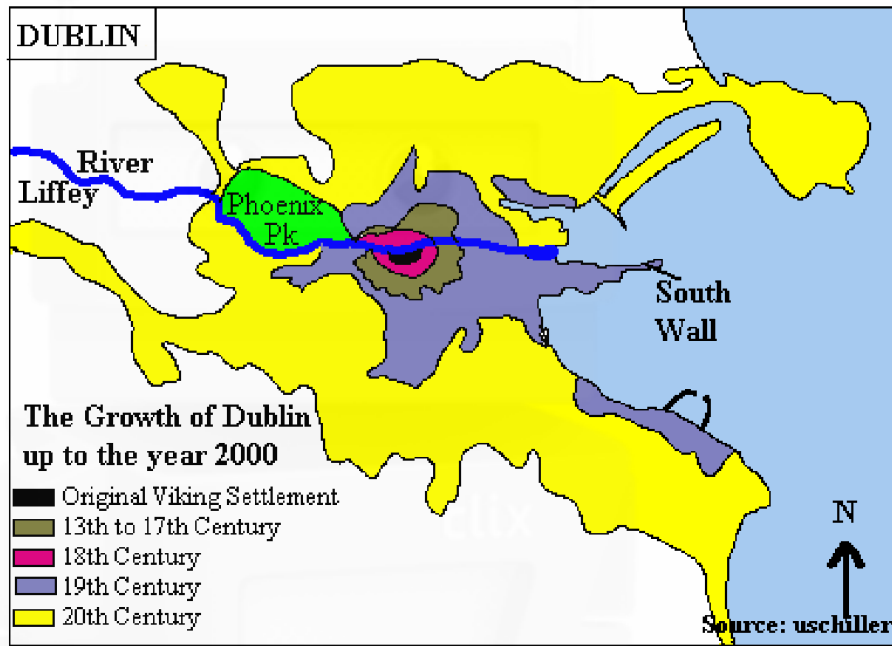
Match **each** of the urban photographs labelled **A – D** with the correct option in the box. One match has been made for you.



Letter	Urban Area
	CBD
	Industrial estate
C	Urban renewal
	Suburb

Question 10

The map shows the growth of Dublin.



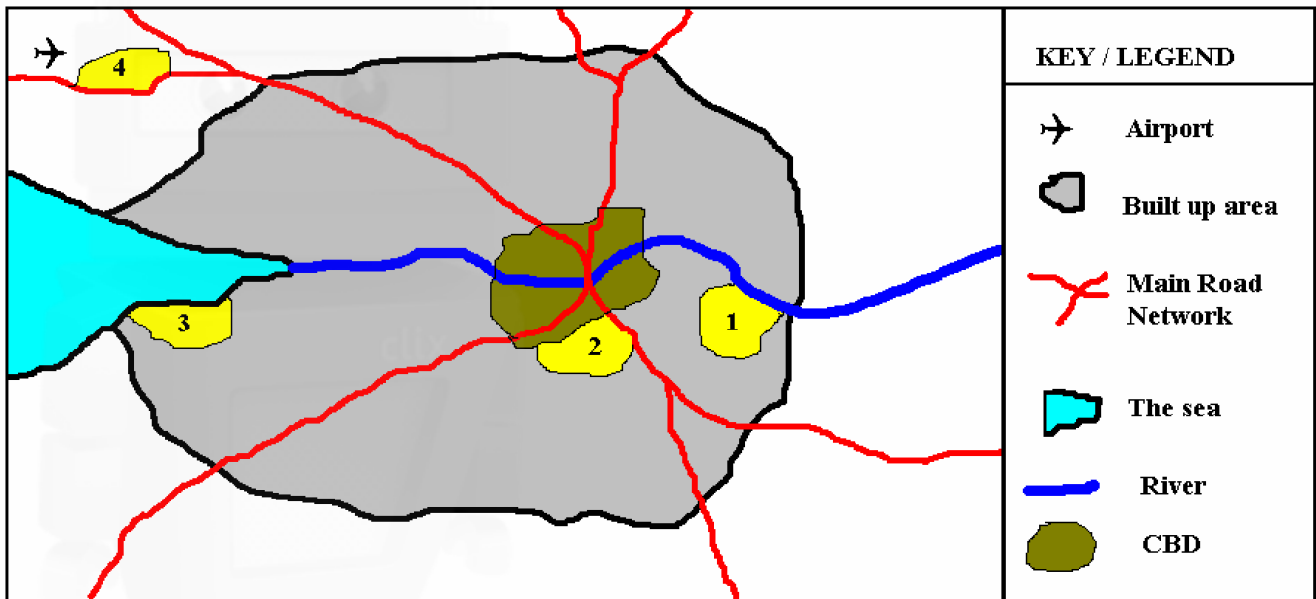
20 th Century
19 th Century
18 th Century
13 th to 17 th Century
North
South

Use the map to complete the paragraph below using items from the table above

The map shows that Dublin grew outwards from a Viking settlement that developed on the _____ side of the River Liffey. It extended to the South Wall in the _____ century. Dublin's period of most rapid growth was during the _____ century.

Question 11

Study the sketch map showing some functional zones within a city.



In the boxes provided, match **each** of the numbers 1 to 4 in the sketch map with the letter of its pair in Column X. One pair has been completed for you.

Column X	
A	Dockside Industries
B	Older Residential Area
C	Modern Industrial Estate
D	Newer Residential Area

X	Number
A	
B	
C	
D	1

Question 12

Read the statements below. Not all of the statements are true.

1. Dolmens, ring forts and castles are all signs of former settlement.
2. A village which clusters around a road junction has a ribboned settlement pattern.
3. The West of Ireland is more densely populated than the East of Ireland.
4. Land values usually increase towards the centre of a city.
5. The River Rhine flows through Germany but enters the sea in The Netherlands.

The correct statements are numbered:

Tick (✓) the correct box.

1, 4, 5

1, 3, 4

2, 3, 4

2, 4, 5

Question 13

A primate city

Tick (✓) the correct box.

Is the city in which a country's parliament meets.

Is the oldest city in a country.

Is a place from which people commute to and from work each day.

Has at least twice the human population of any other city in a country.

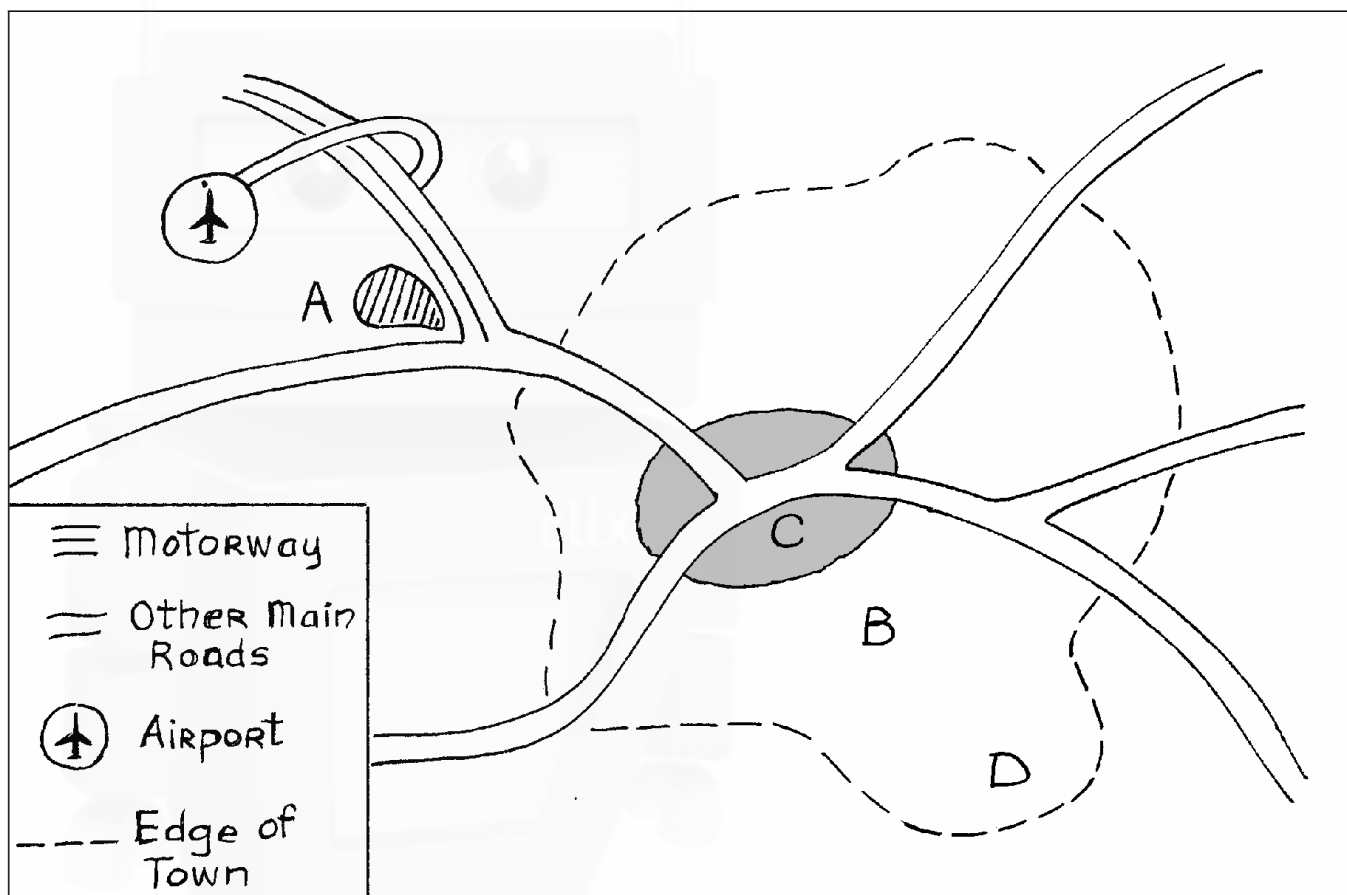
Question 14

Indicate whether **each** of the statements below is true or false by circling the “*True*” or “*False*” option.

- (i) A **primate city** has at least twice the population of any other city in a country. *True / False*
- (ii) A **bustee** is a slum area in a city of a developing country. *True / False*
- (iii) **Commuters** are people who travel long distances to work every day. *True / False*

Question 15

The sketch map contains four labelled, functional zones in an imaginary large town in Ireland.



Match **each** of the labels **A – D** on the map with its matching pair from the four Function Zones listed in the table below. One pair has been completed for you.

Functional Zone	Matching label (letter)
C.B.D.	
Older residential (housing) area	
Newer residential area	
Industrial Estate	A